













Maths Money

Your class is visiting the local farm shop. You are allowed to spend money in the shop. Here are some of the things that are on sale in the shop.

 <p>Bag of carrots 60p</p>	 <p>Loose carrots 10p</p>	 <p>Fresh peas £1.50</p>	 <p>Orange pepper 50p</p>	 <p>Green pepper 45p</p>
 <p>Corn on the cob 30p</p>	 <p>Tomato 20p</p>	 <p>Broccoli 60p</p>	 <p>Yellow pepper 45p</p>	 <p>Red pepper 45p</p>

A)

- 1) How much would two corn on the cob cost?

- 2) What is the total cost of a green pepper and a red pepper?

- 3) How much change out of £1.00 would you get if you bought broccoli?









- 4) One of the children bought fresh peas and paid with two coins. What would they be?

- 5) Katy bought a bag of carrots, an orange pepper and three tomatoes. How much did she spend?

- 6) Oliver bought a bag of peas and a red pepper. How much change did he get from £2.00?

Compound words

Compound word game

 water	+	 cr ess	=	_____		
mush	+	 _____	=	_____		
 _____	+	 corn	=	_____		
 butter	+	 nut	+	 _____	=	_____